


Comparing Liquid Volumes

A) Circle the containers with a greater capacity than the given container.

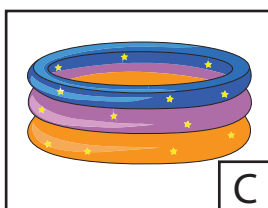
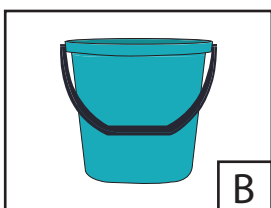
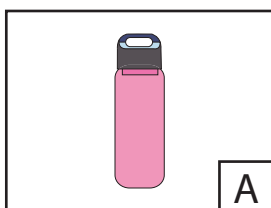


B) Circle the containers with a lesser capacity than the given container.

Preview

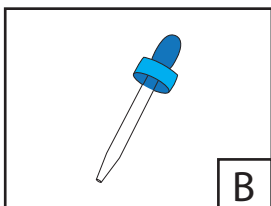
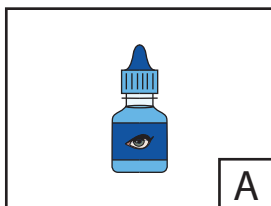
Become a member to unlock
unrestricted access to both printable
and online worksheets.

www.tutoringhour.com



C → _____ → _____

2) From the one that holds the least to the one that holds the most



B → _____ → _____