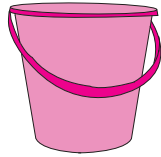


Comparing Liquid Volumes

A) Circle the containers with a greater capacity than the given container.



B) Circle the containers with a lesser capacity than the given container.

Preview

Become a member to unlock
unrestricted access to both printable
and online worksheets.

www.tutoringhour.com




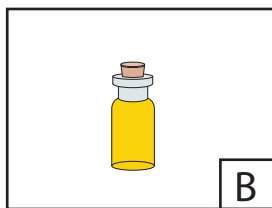

C) C

1) T

2) T


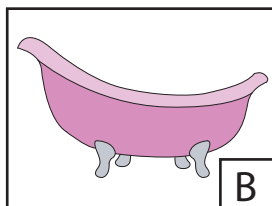
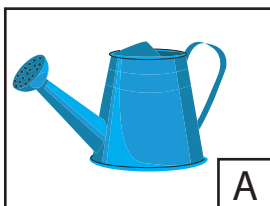
D) C

1) F



 A → →

2) From the one that holds the least to the one that holds the most



 C → →