




Capacity | Customary Units

Write the capacity of each individual container.

1)  =  Capacity of each  = _____ qt

2)

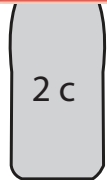
Preview

Become a member to unlock
unrestricted access to both printable
and online worksheets.

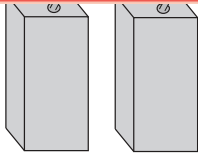
www.tutoringhour.com

3)

4)



=



Capacity of each

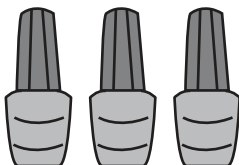


= _____ c

5)



=



Capacity of each



= _____ tbsp