

Capacity | Metric Units

Write the capacity of each individual container.

1)



=



Capacity of each



= _____ mL

2)

Preview

Become a member to unlock
unrestricted access to both printable
and online worksheets.

www.tutoringhour.com

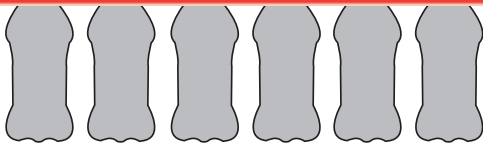


3)

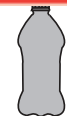
4)



=



Capacity of each

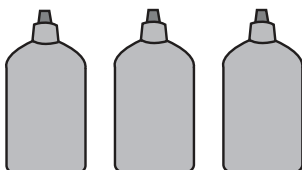


= _____ mL

5)



=



Capacity of each



= _____ mL