

Capacity | Metric Units

Write the capacity of each individual container.

1)



=



Capacity of each  = _____ mL

2)


Preview

Become a member to unlock
unrestricted access to both printable
and online worksheets.

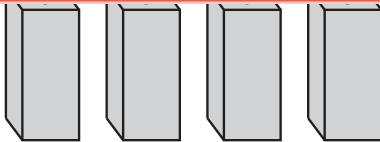
www.tutoringhour.com

3)

4)

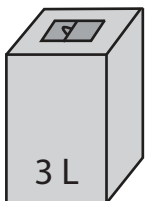


=



Capacity of each  = _____ mL

5)



=



Capacity of each  = _____ L