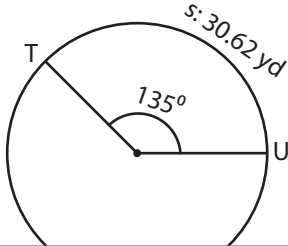


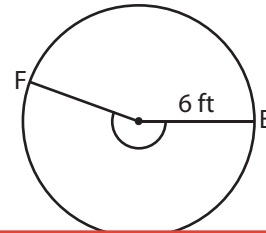
Arc Length of the Sector

Find the radius, central angle, and arc length(s) of each circle. Round the radius and central angle to the nearest whole number, and the arc length to two decimal places. (Use 3.14 for π)

1)



2)



3)

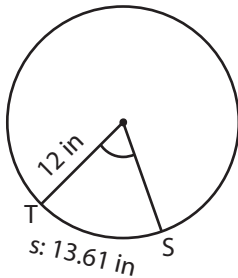
Preview

Become a member to unlock
unrestricted access to both printable
and online worksheets.



www.tutoringhour.com

5)

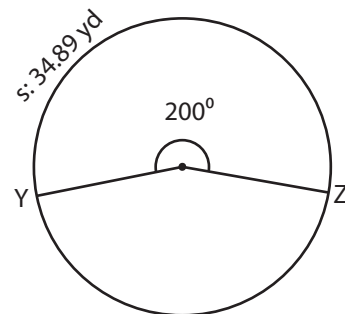


Radius: _____

Central angle: _____

Length of the arc ST: _____

6)



Radius: _____

Central angle: _____

Length of the arc YZ: _____