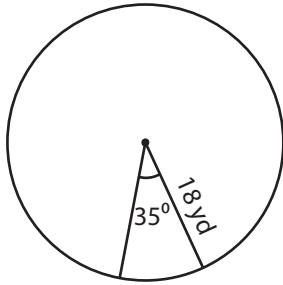


Arc Length of the Sector

Answer Key

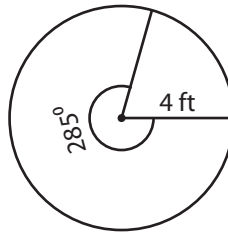
Find the arc length of each sector. Round your answer to two decimal places. (Use 3.14 for π .)

1)



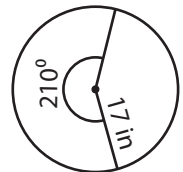
10.99 yd

2)



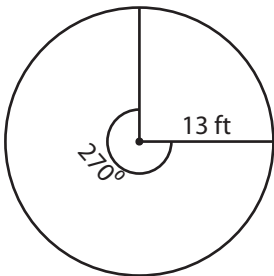
19.89 ft

3)



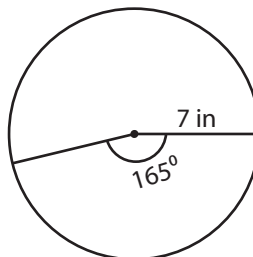
62.28 in

4)



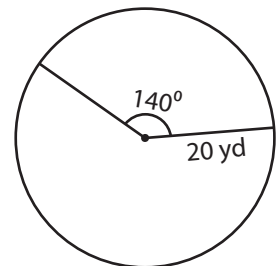
61.23 ft

5)



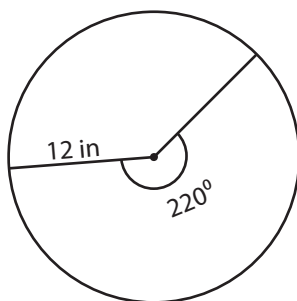
20.15 in

6)



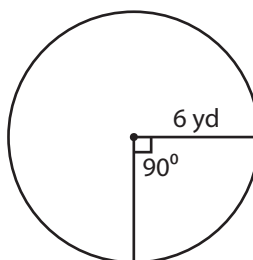
48.84 yd

7)



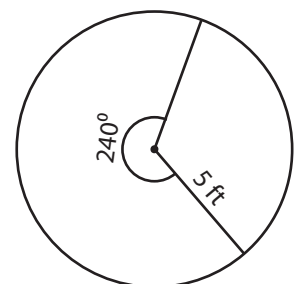
46.05 in

8)



9.42 yd

9)



20.93 ft