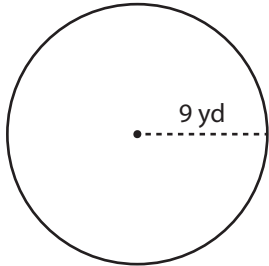


# Area and Circumference

Find the area and circumference of each circle. Round your answer to the nearest tenth. (Use 3.14 for  $\pi$ .)

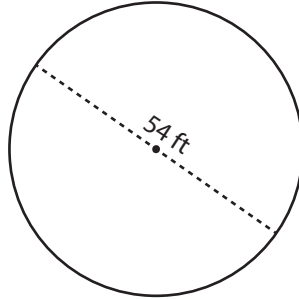
1)



Area: \_\_\_\_\_

Circumference: \_\_\_\_\_

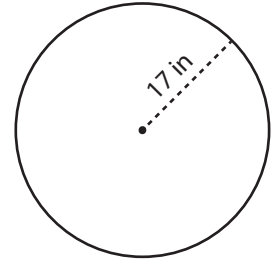
2)



Area: \_\_\_\_\_

Circumference: \_\_\_\_\_

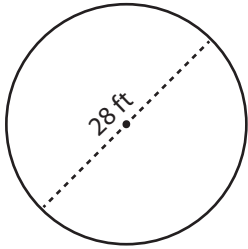
3)



Area: \_\_\_\_\_

Circumference: \_\_\_\_\_

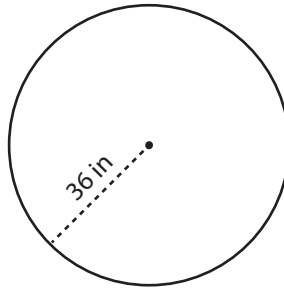
4)



Area: \_\_\_\_\_

Circumference: \_\_\_\_\_

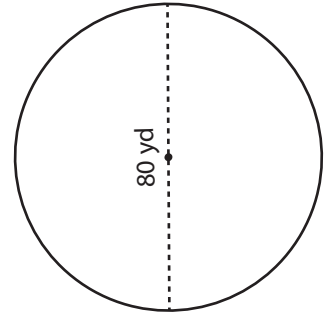
5)



Area: \_\_\_\_\_

Circumference: \_\_\_\_\_

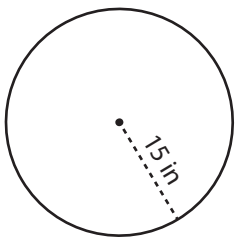
6)



Area: \_\_\_\_\_

Circumference: \_\_\_\_\_

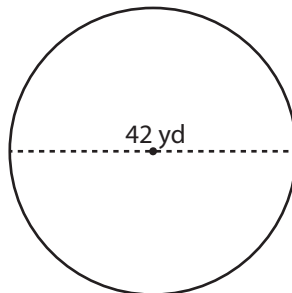
7)



Area: \_\_\_\_\_

Circumference: \_\_\_\_\_

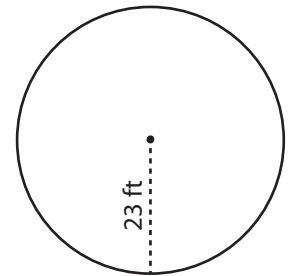
8)



Area: \_\_\_\_\_

Circumference: \_\_\_\_\_

9)



Area: \_\_\_\_\_

Circumference: \_\_\_\_\_