

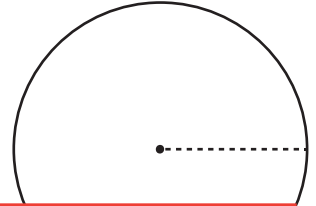
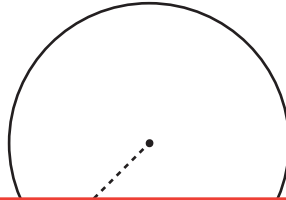
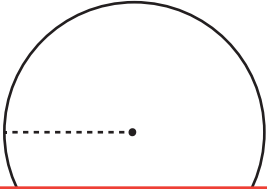
Area and Circumference

Find the area of each circle using the given circumference. Round your answer to the nearest tenth. (Use 3.14 for π .)

1) Circumference: 38 yd

2) Circumference: 160.2 in

3) Circumference: 100 ft



Preview

Become a member to unlock
unrestricted access to both printable
and online worksheets.



www.tutoringhour.com

4) Circ

in

7) Circumference: 91 in

8) Circumference: 40.7 ft

9) Circumference: 116 yd

