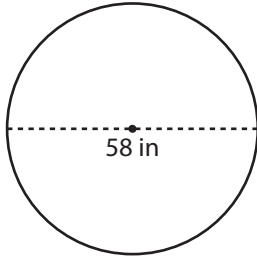


# Radius and Diameter

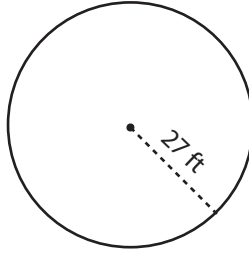
**Answer Key**

Find the radius or diameter of each circle.

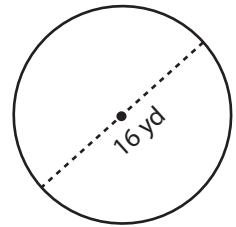
1)

Radius = 29 in

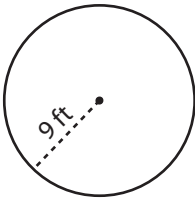
2)

Diameter = 54 ft

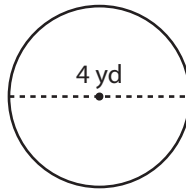
3)

Radius = 8 yd

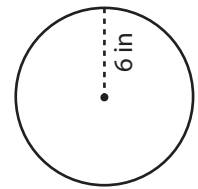
4)

Diameter = 18 ft

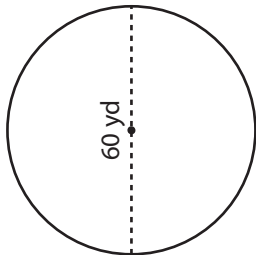
5)

Radius = 2 yd

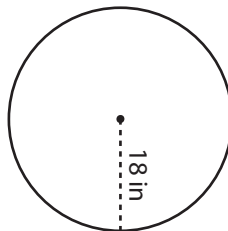
6)

Diameter = 12 in

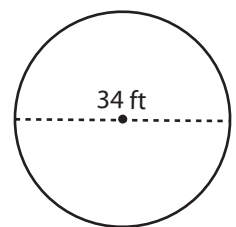
7)

Radius = 30 yd

8)

Diameter = 36 in

9)

Radius = 17 ft