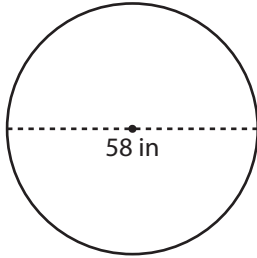


Radius and Diameter

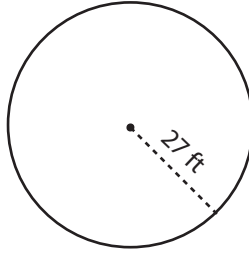
Find the radius or diameter of each circle.

1)



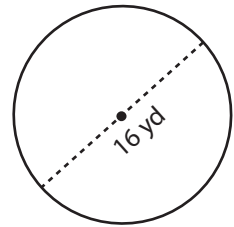
Radius = _____

2)



Diameter = _____

3)



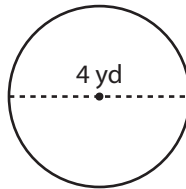
Radius = _____

4)



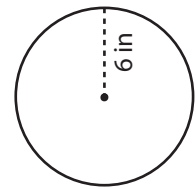
Diameter = _____

5)



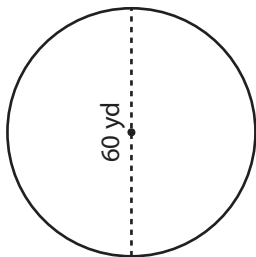
Radius = _____

6)



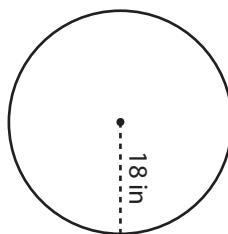
Diameter = _____

7)



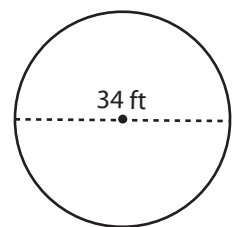
Radius = _____

8)



Diameter = _____

9)



Radius = _____