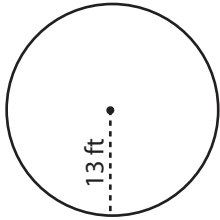


# Radius and Diameter

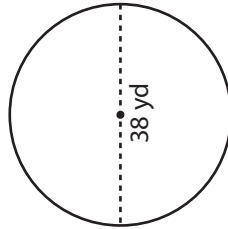
**Answer Key**

Find the radius or diameter of each circle.

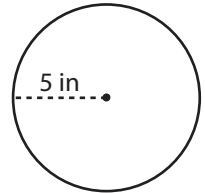
1)

Diameter = 26 ft

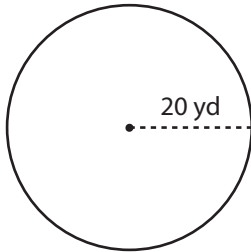
2)

Radius = 19 yd

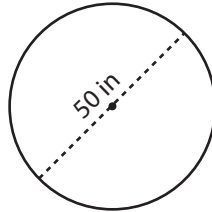
3)

Diameter = 10 in

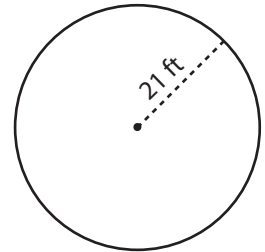
4)

Diameter = 40 yd

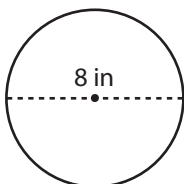
5)

Radius = 25 in

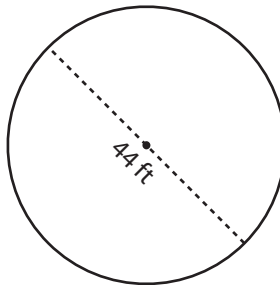
6)

Diameter = 42 ft

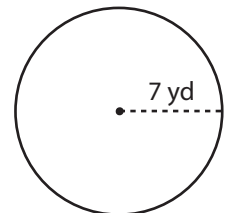
7)

Radius = 4 in

8)

Radius = 22 ft

9)

Diameter = 14 yd