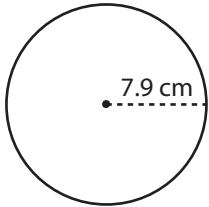


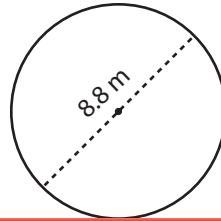
# Radius and Diameter

Find the radius or diameter of each circle. Round your answer to the nearest tenth.

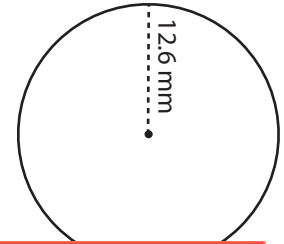
1)



2)



3)



Di

# Preview

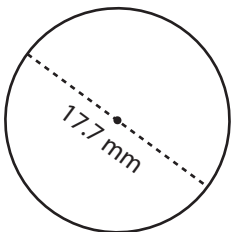
4)

Become a member to unlock  
unrestricted access to both printable  
and online worksheets.

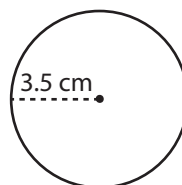


[www.tutoringhour.com](http://www.tutoringhour.com)

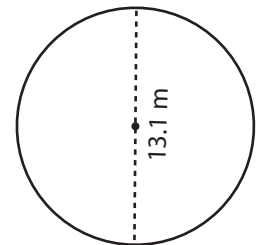
7)



8)



9)



Radius = \_\_\_\_\_

Diameter = \_\_\_\_\_

Radius = \_\_\_\_\_