




Counting Backward by 10s

Count backward by 10s and write the missing numbers.

1)



2)

Preview

Become a member to unlock
unrestricted access to both printable
and online worksheets.

3)

www.tutoringhour.com



4)

