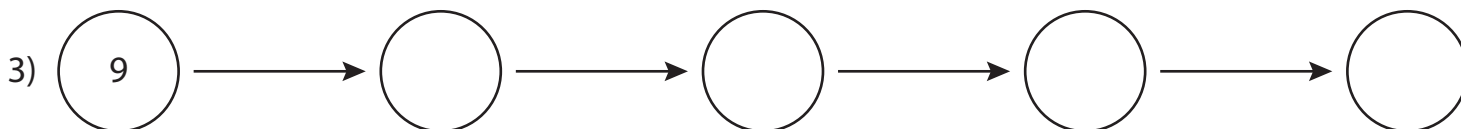
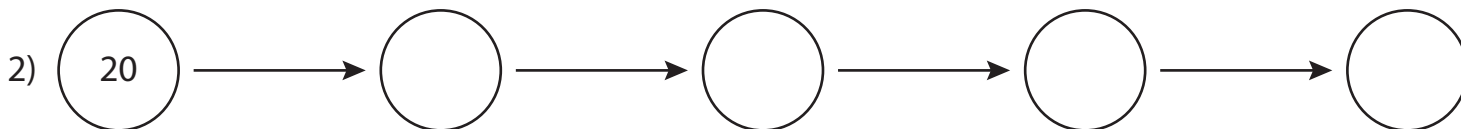
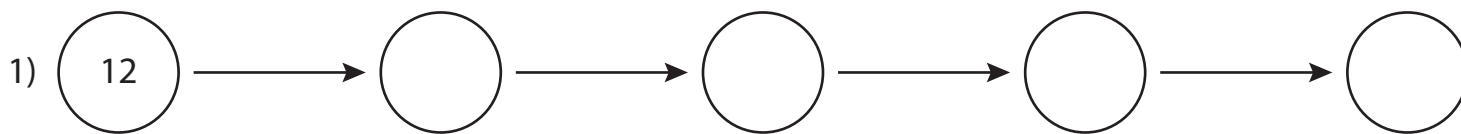

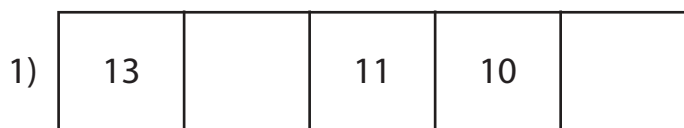


# Counting Backward by Ones within 20

A) Complete each pattern.



B) Count backward by ones and write the missing numbers in the boxes.



C) Choose the correct option.

1) What is the pattern if you start at 14 and skip backward by 1s thrice?

- a) 14, 13, 12, 11      b) 15, 16, 17, 18      c) 15, 14, 13, 12      d) 14, 15, 16, 17

2) If you start at 7 and skip backward by 1s until you reach 2, how many skips did you take?

- a) 3 skips      b) 6 skips      c) 4 skips      d) 5 skips