





# Counting Forward by Ones | Up to 10

Count forward by ones and fill in the missing numbers.

1)    





→  →  →

2) **Preview**

3) **Become a member to unlock  
unrestricted access to both printable  
and online worksheets.**

4) [www.tutoringhour.com](http://www.tutoringhour.com)

→  →   → 

5)    

→  →  →