



# Ten Frames | Counting to 10

How many counters are there in each ten frame?

1)



2)



3)

# Preview


Become a member to unlock  
unrestricted access to both printable  
and online worksheets.

www.tutoringhour.com



5}

7)



8)

