


Dividing Decimals Using Number Lines

Indicate hops on each number line and complete the division sentence.

1) $8.4 \div 1.4 = \underline{\hspace{2cm}}$




2) $14.6 \div 7.3 = \underline{\hspace{2cm}}$

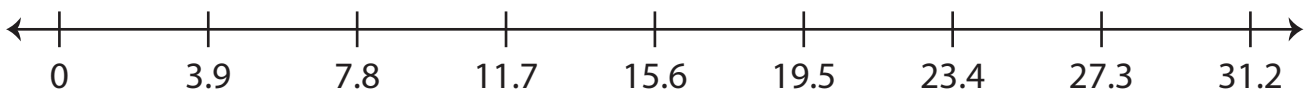
3)

4)

5) $9.2 \div 2.3 = \underline{\hspace{2cm}}$



6) $27.3 \div 3.9 = \underline{\hspace{2cm}}$



Preview

Become a member to unlock
unrestricted access to both printable
and online worksheets.



www.tutoringhour.com