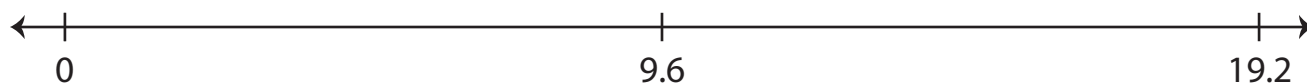



Multiplying Decimals Using Number Lines

Draw hops on each number line and complete the multiplication sentence.

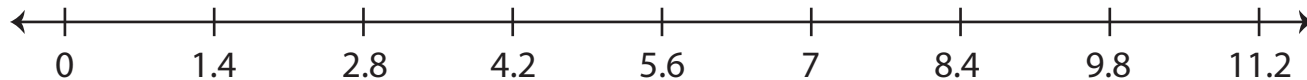
1) $9.6 \times 1 = \underline{\hspace{2cm}}$




2) $4.2 \times 7 = \underline{\hspace{2cm}}$



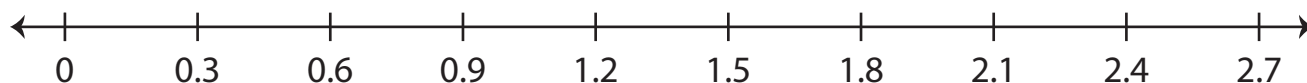
3) $1.4 \times 5 = \underline{\hspace{2cm}}$



4) $8.8 \times 3 = \underline{\hspace{2cm}}$



5) $0.3 \times 9 = \underline{\hspace{2cm}}$



6) $3.7 \times 5 = \underline{\hspace{2cm}}$

