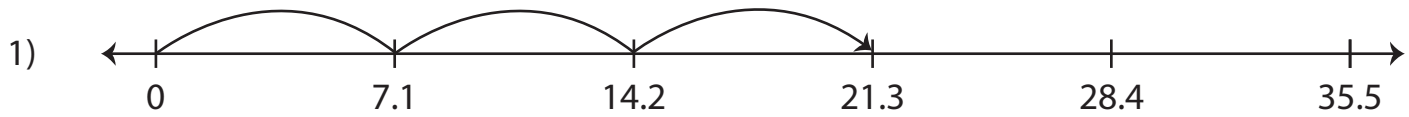


Multiplying Decimals Using Number Lines

Complete the multiplication sentence that describes each model.



$$\underline{\quad} \times 3 = 21.3$$

2)

Preview

3)


**Become a member to unlock
unrestricted access to both printable
and online worksheets.**

4)

www.tutoringhour.com

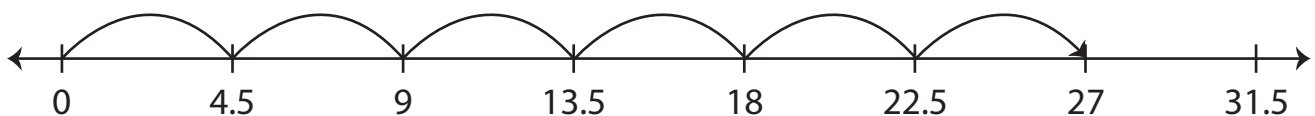


5)



$$\underline{\quad} \times 1 = 5.3$$

6)



$$4.5 \times \underline{\quad} = 27$$