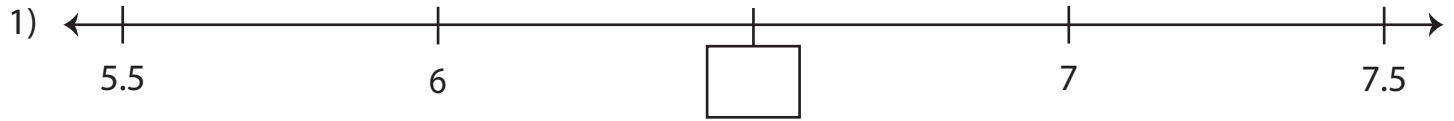
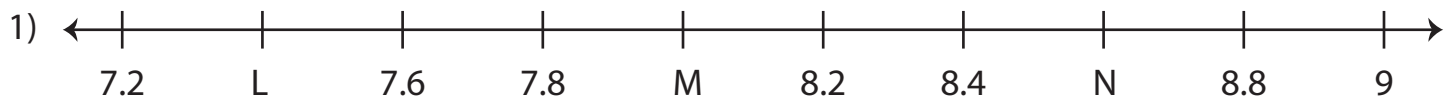


Decimals on a Number Line

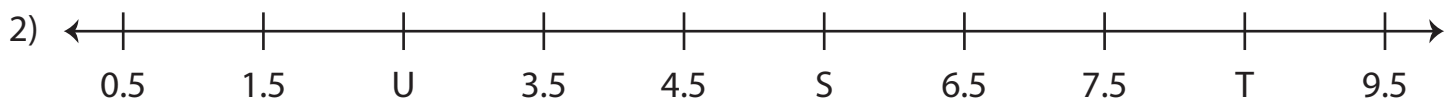
A) Write the missing decimals and complete each number line.



B) What decimal numbers do the letters on each number line represent?



L = _____ ; M = _____ ; N = _____



S = _____ ; T = _____ ; U = _____