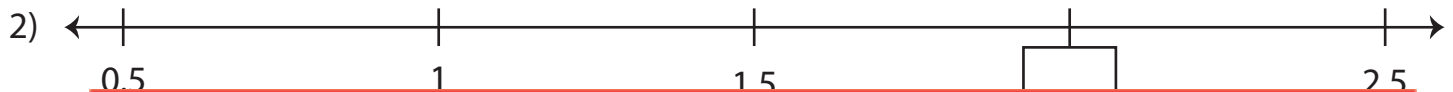
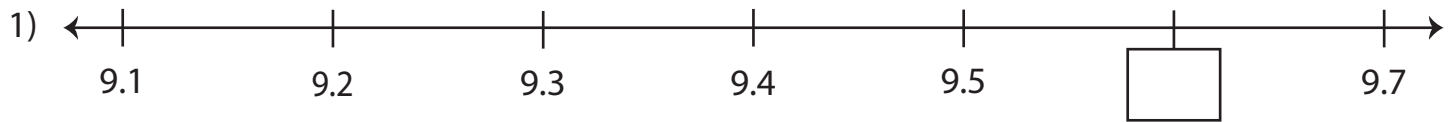
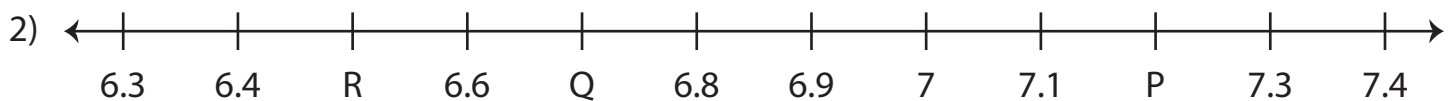


Decimals on a Number Line

A) Write the missing decimals and complete each number line.



X = _____ ; Y = _____ ; Z = _____



P = _____ ; Q = _____ ; R = _____

Preview

Become a member to unlock
unrestricted access to both printable
and online worksheets.

www.tutoringhour.com

