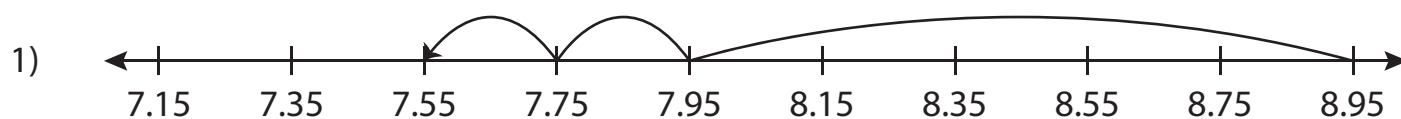


Subtracting Decimals Using Number Lines

Write the subtraction sentence that describes each model.



$$\underline{\hspace{2cm}} - \underline{\hspace{2cm}} = \underline{\hspace{2cm}}$$

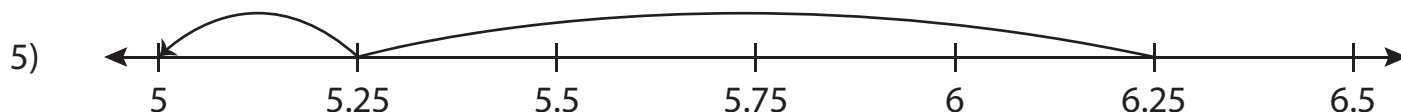


3) **Preview**

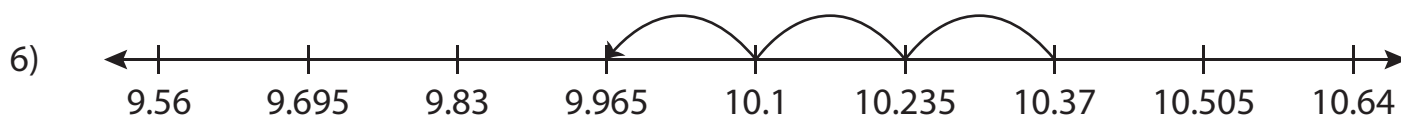
4) **Become a member to unlock
unrestricted access to both printable
and online worksheets.**



www.tutoringhour.com



$$\underline{\hspace{2cm}} - \underline{\hspace{2cm}} = \underline{\hspace{2cm}}$$



$$\underline{\hspace{2cm}} - \underline{\hspace{2cm}} = \underline{\hspace{2cm}}$$