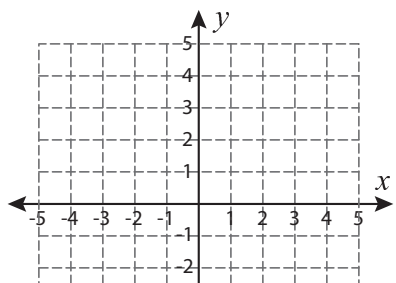


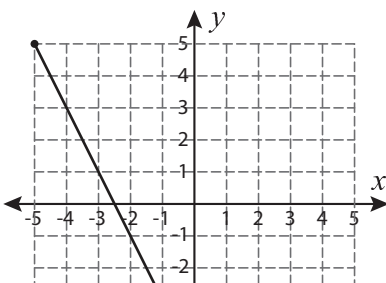
# Length | Pythagorean Theorem

Find the length of each line segment using the Pythagorean theorem. Verify the answer using distance formula. Round the answer to the nearest tenth.

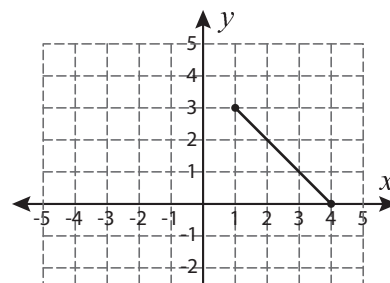
1)



2)



3)



4)

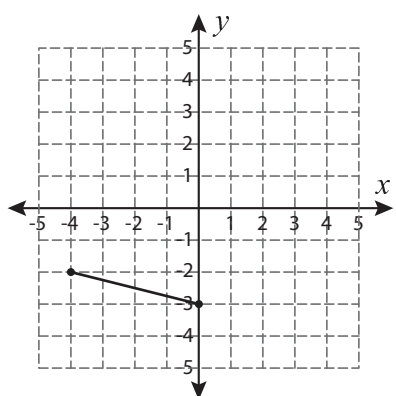
**Preview**

Become a member to unlock  
unrestricted access to both printable  
and online worksheets.

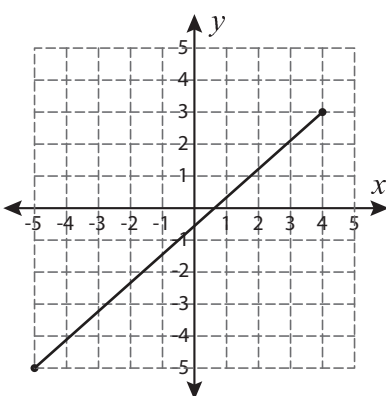


[www.tutoringhour.com](http://www.tutoringhour.com)

7)



8)



9)

