

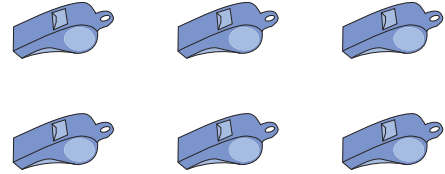
Division with Arrays

Complete the division sentence that describes each array.

1)



2)



3)


Preview

**Become a member to unlock
unrestricted access to both printable
and online worksheets.**




www.tutoringhour.com

5)



$$16 \div \square = 4$$

6)



$$\square \div 3 = 5$$