


Equal Groups

Answer Key


Write a division equation to describe each model.

1)



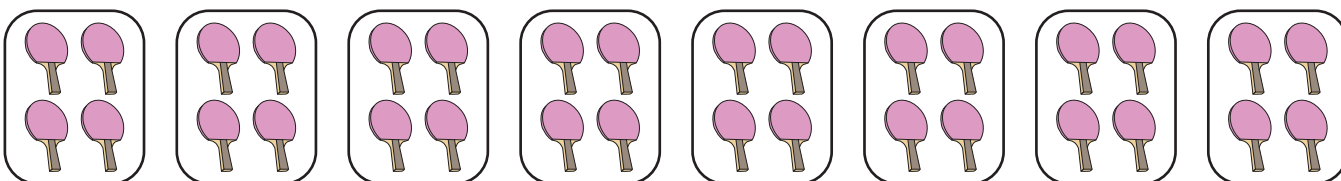
$$\underline{28} \div \underline{7} = \underline{4} \text{ groups}$$

2)




$$\underline{15} \div \underline{5} = \underline{3} \text{ groups}$$

3)




$$\underline{32} \div \underline{4} = \underline{8} \text{ groups}$$

4)



$$\underline{6} \div \underline{2} = \underline{3} \text{ groups}$$

5)



$$\underline{10} \div \underline{2} = \underline{5} \text{ groups}$$