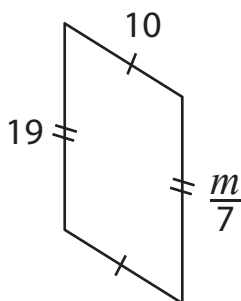


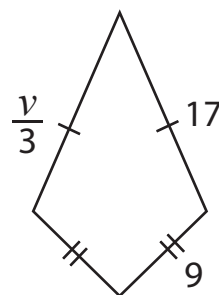
One-Step Equations | Multiplication and Division

Find the values of the given variables.

1)



2)



3)

Preview

Become a member to unlock
unrestricted access to both printable
and online worksheets.



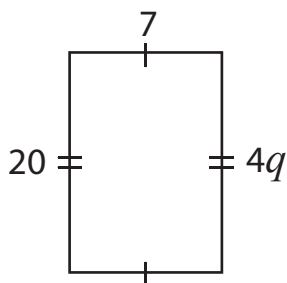
www.tutoringhour.com

5)

$x =$ _____

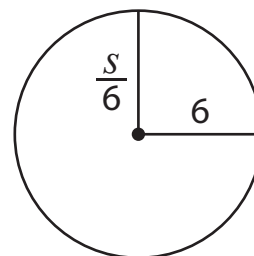
$g =$ _____

7)



$q =$ _____

8)



$s =$ _____