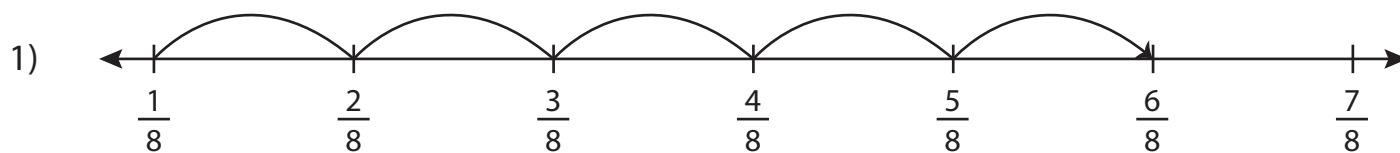


Adding Fractions on a Number Line

Complete the addition sentence that describes each model.



$$\underline{\hspace{2cm}} + \frac{5}{8} = \frac{6}{8}$$

2)

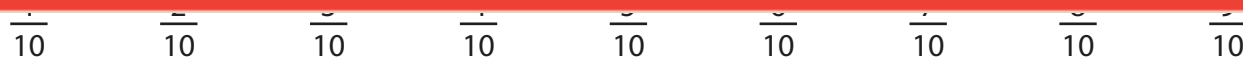
Preview

Become a member to unlock
unrestricted access to both printable
and online worksheets.



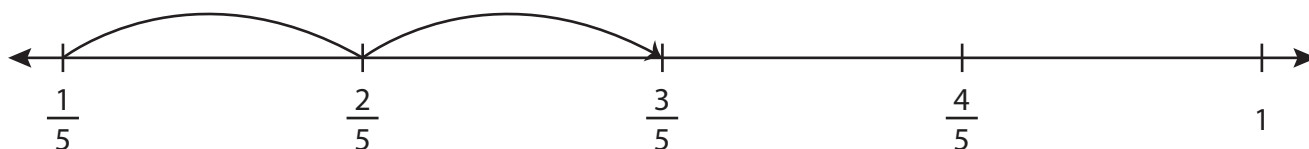
www.tutoringhour.com

3)



$$\frac{5}{10} + \underline{\hspace{2cm}} = \frac{9}{10}$$

4)



$$\underline{\hspace{2cm}} + \frac{2}{5} = \frac{3}{5}$$