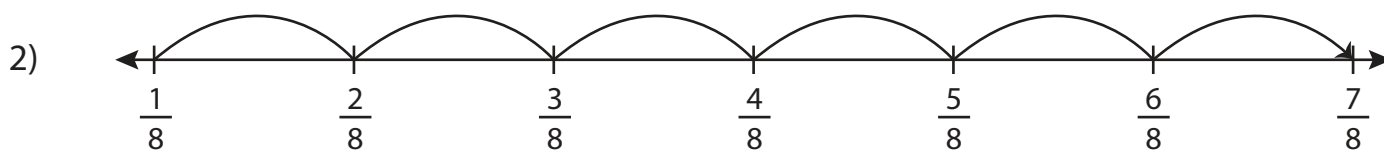


# Adding Fractions on a Number Line

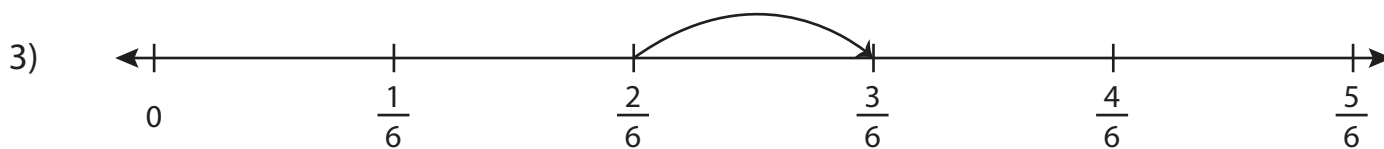
Complete each addition sentence using the number line.



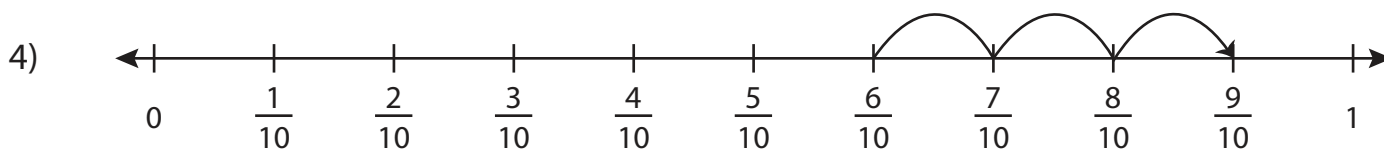
$$\frac{2}{4} + \frac{2}{4} = \underline{\hspace{2cm}}$$



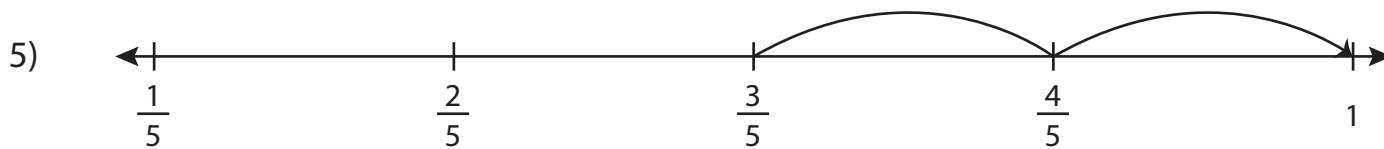
$$\frac{1}{8} + \frac{6}{8} = \underline{\hspace{2cm}}$$



$$\frac{2}{6} + \frac{1}{6} = \underline{\hspace{2cm}}$$



$$\frac{6}{10} + \frac{3}{10} = \underline{\hspace{2cm}}$$



$$\frac{3}{5} + \frac{2}{5} = \underline{\hspace{2cm}}$$