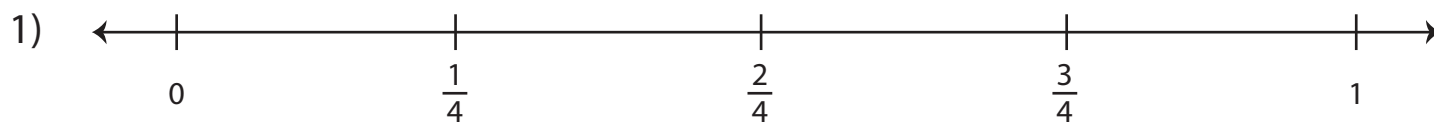


Comparing Fractions

Locate each pair of fractions on the number lines, and compare them using $>$, $<$, or $=$.



i) $\frac{3}{4}$  $\frac{1}{4}$

ii) $\frac{2}{4}$  $\frac{3}{4}$

2)

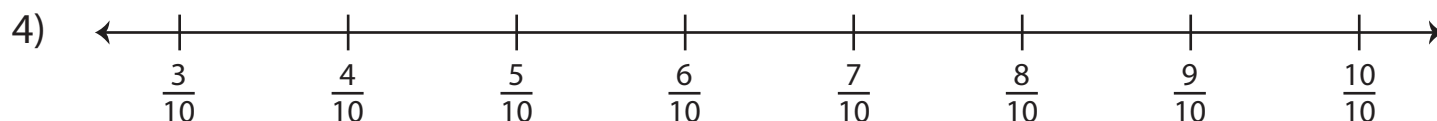
3)


Preview

Become a member to unlock
unrestricted access to both printable
and online worksheets.



www.tutoringhour.com



i) $\frac{4}{10}$  $\frac{7}{10}$

ii) $\frac{9}{10}$  $\frac{6}{10}$