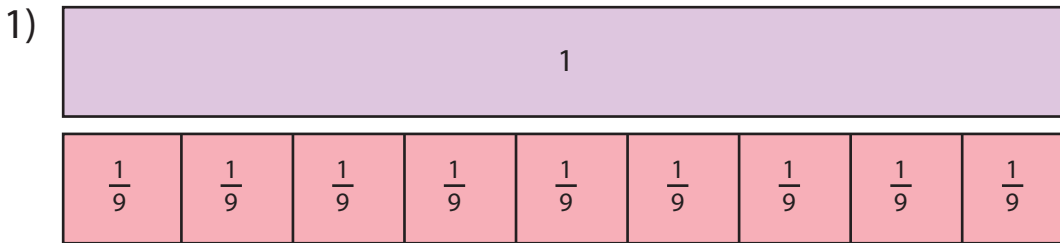


# Dividing Fractions | Visual Models

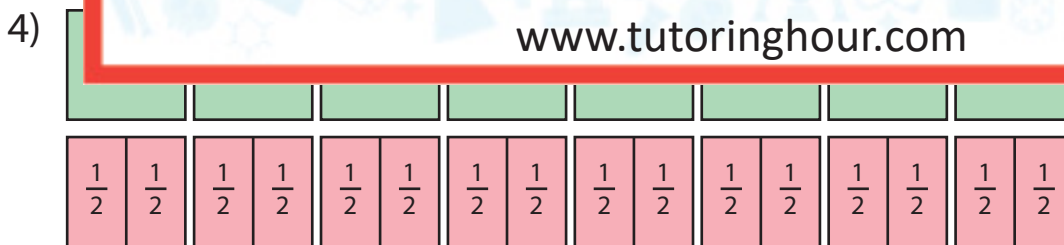
Divide the whole numbers by unit fractions using the models given.



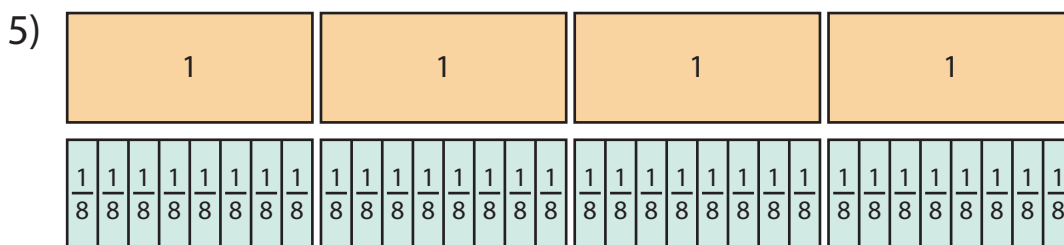
$$1 \div \frac{1}{9} = \underline{\hspace{2cm}}$$

2)

3)



$$8 \div \frac{1}{2} = \underline{\hspace{2cm}}$$



$$4 \div \frac{1}{8} = \underline{\hspace{2cm}}$$