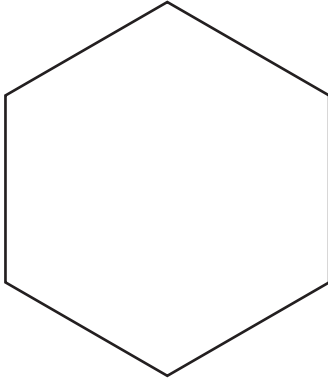



Partitioning Shapes into Equal Parts

Divide the shapes into equal parts as directed.

- 1) Draw lines to divide the hexagon into six triangles.



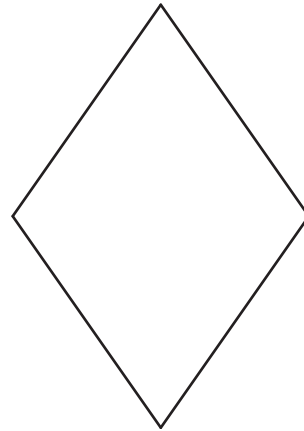
- 2) Draw a line to divide the circle into two semicircles.




- 3) Draw lines to divide the rectangle into five rectangles.



- 4) Draw a line to divide the rhombus into two triangles.



- 5) Draw lines to divide the square into four triangles.



- 6) Draw lines to divide the pentagon into ten triangles.

