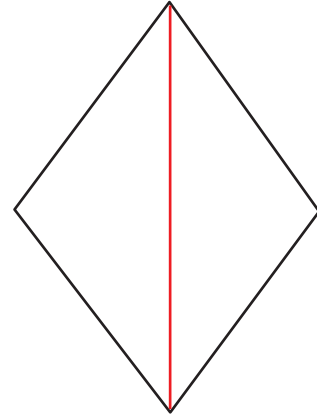
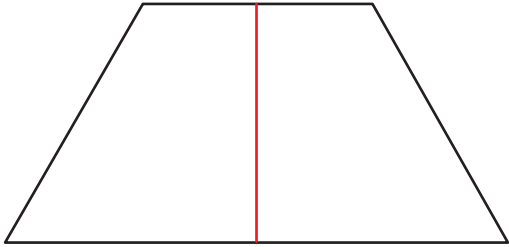


Partitioning Shapes into Equal Parts

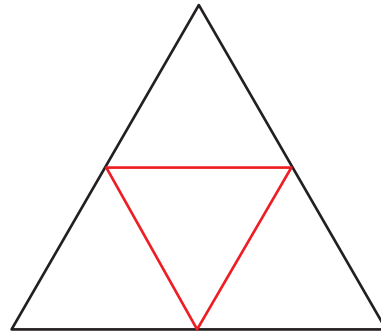
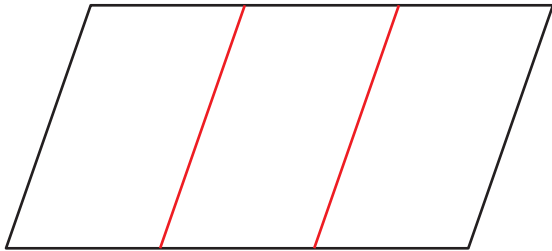
Answer Key

Divide the shapes into equal parts as directed. **(Illustrations may vary.)**

- 1) Draw a line to divide the trapezoid into two trapezoids. 2) Draw a line to divide the rhombus into two triangles.



- 3) Draw lines to divide the parallelogram into three parallelograms. 4) Draw lines to divide the triangle into four triangles.



- 5) Draw lines to divide the rectangle into eight squares. 6) Draw lines to divide the hexagon into six kites.

