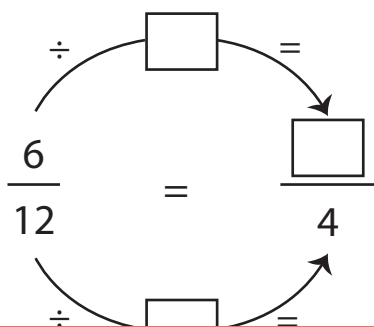
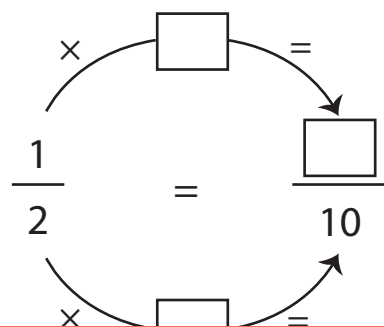


Finding Equivalent Fractions | Step by Step

1) $\frac{6}{12}$



2) $\frac{1}{2}$



3)

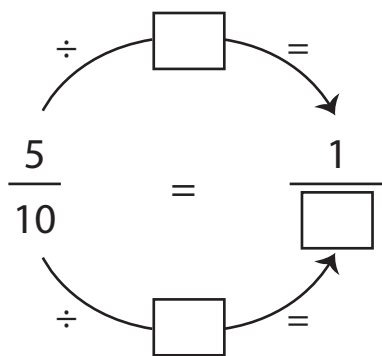
Preview

Become a member to unlock
unrestricted access to both printable
and online worksheets.



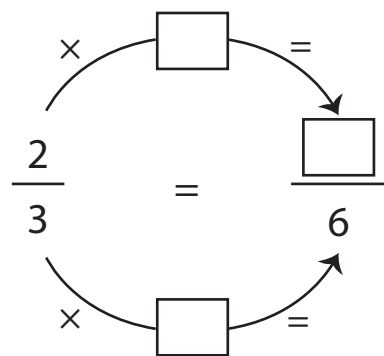
www.tutoringhour.com

5) $\frac{5}{10}$



Equivalent fraction: _____

6) $\frac{2}{3}$



Equivalent fraction: _____