









# Fractions of a Group

Observe each group of pictures and write the fraction to show what part of the set is colored.

1)

2)

3)

4)

## Preview

Become a member to unlock  
unrestricted access to both printable  
and online worksheets.

[www.tutoringhour.com](http://www.tutoringhour.com)



					
---	---	---	---	--	--

5)

