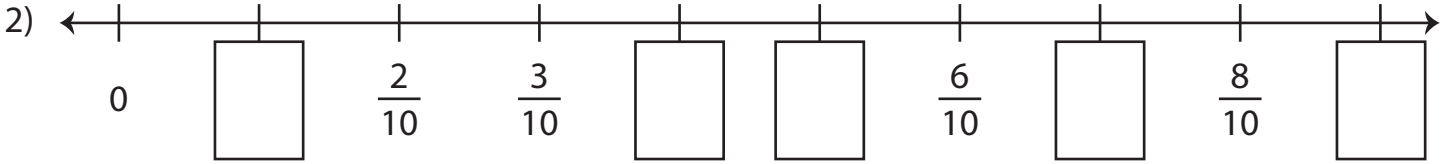

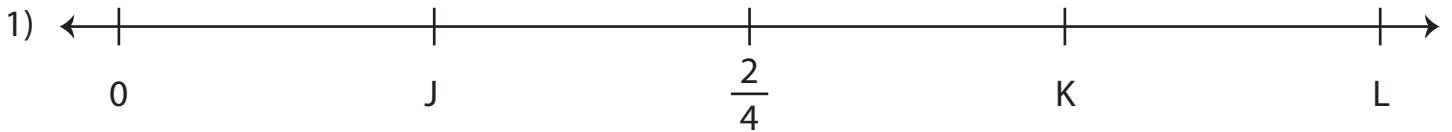


# Fractions on a Number Line

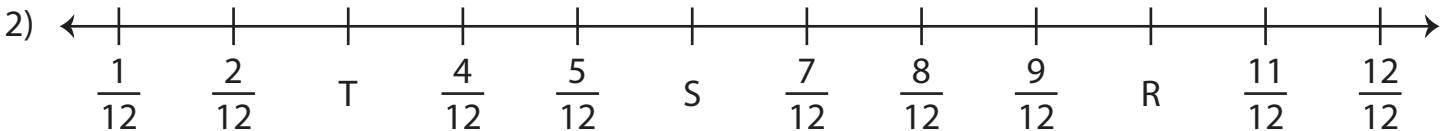
A) Fill in the missing fractions on each number line.



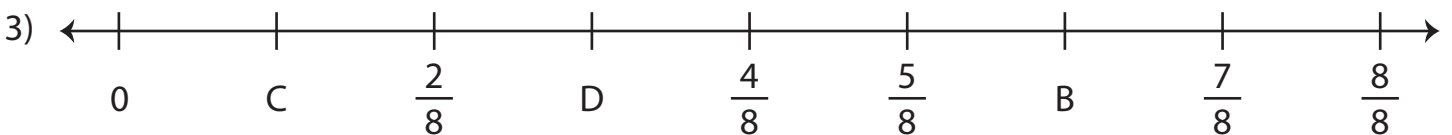
B) What fractions do the letters on each number line represent?



$$J = \underline{\hspace{2cm}} ; K = \underline{\hspace{2cm}} ; L = \underline{\hspace{2cm}}$$



$$R = \underline{\hspace{2cm}} ; S = \underline{\hspace{2cm}} ; T = \underline{\hspace{2cm}}$$



$$B = \underline{\hspace{2cm}} ; C = \underline{\hspace{2cm}} ; D = \underline{\hspace{2cm}}$$