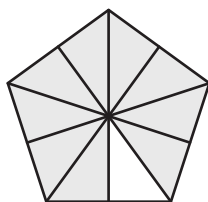


Parts of a Whole

Answer Key

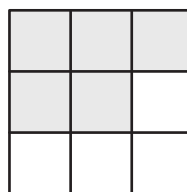
A) Write what fraction of each model is shaded.

1)



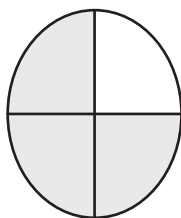
$$\frac{9}{10}$$

2)



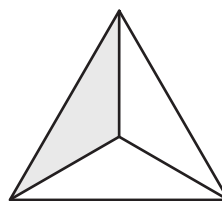
$$\frac{5}{9}$$

3)



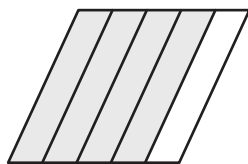
$$\frac{3}{4}$$

4)



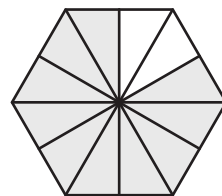
$$\frac{1}{3}$$

5)



$$\frac{4}{5}$$


6)



$$\frac{10}{12}$$

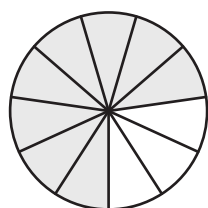
B) Match each model to the fraction it represents.

1)



$$\frac{8}{11}$$

2)



$$\frac{1}{4}$$

3)



$$\frac{1}{2}$$