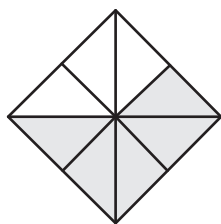


Parts of a Whole

Answer Key


A) Write what fraction of each model is shaded.

1)



$$\frac{5}{8}$$

2)



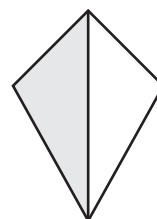
$$\frac{3}{5}$$

3)



$$\frac{2}{7}$$

4)




$$\frac{1}{2}$$

5)



$$\frac{4}{6}$$

6)



$$\frac{7}{9}$$

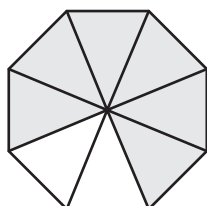
B) Match each model to the fraction it represents.

1)



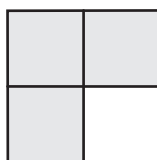
$$\frac{3}{4}$$

2)



$$\frac{1}{3}$$

3)



$$\frac{6}{8}$$