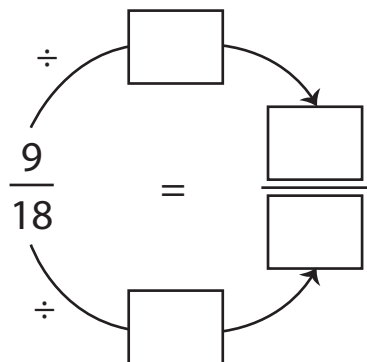


Simplifying Fractions | GCF Method

Simplify each fraction using the GCF method.

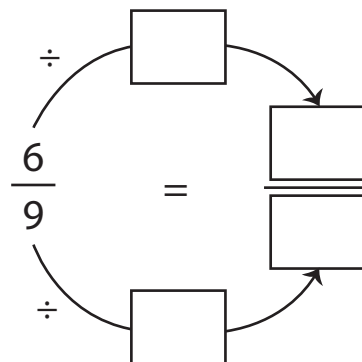
1) $\frac{9}{18}$

GCF of 9 and 18 = _____



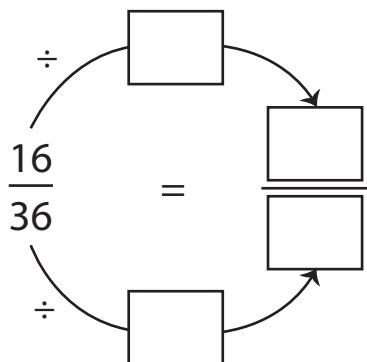
2) $\frac{6}{9}$

GCF of 6 and 9 = _____



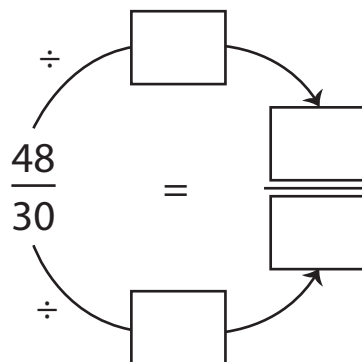
3) $\frac{16}{36}$

GCF of 16 and 36 = _____



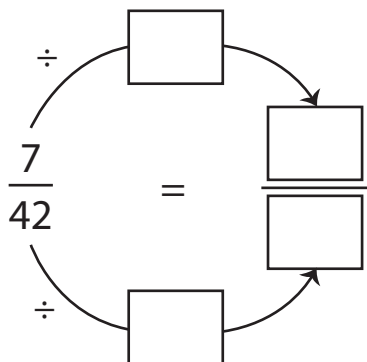
4) $\frac{48}{30}$

GCF of 48 and 30 = _____



5) $\frac{7}{42}$

GCF of 7 and 42 = _____



6) $\frac{14}{6}$

GCF of 14 and 6 = _____

