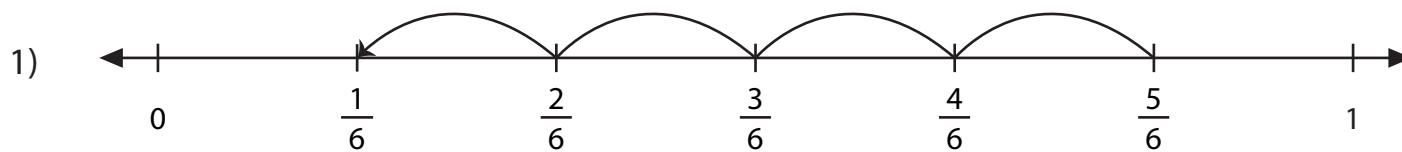


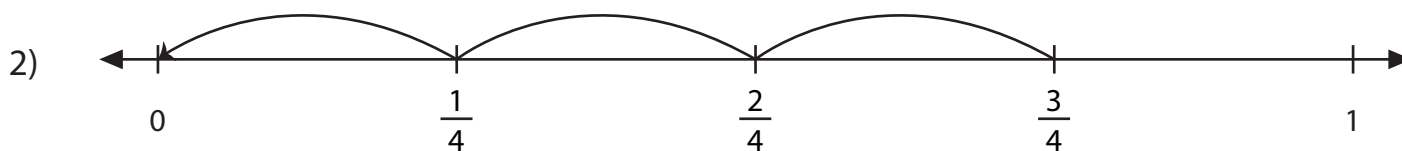
Subtracting Fractions on a Number Line

Answer Key

Complete each subtraction sentence using the number line.



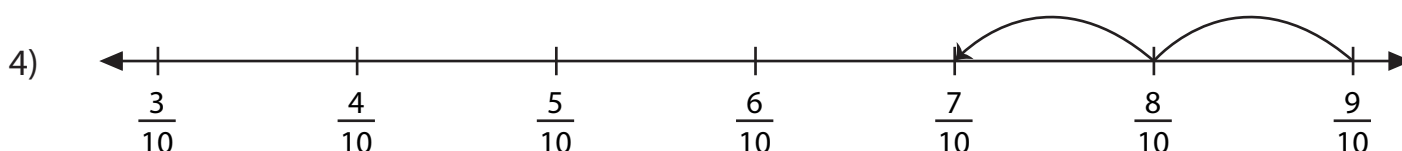
$$\frac{5}{6} - \frac{4}{6} = \underline{\frac{1}{6}}$$



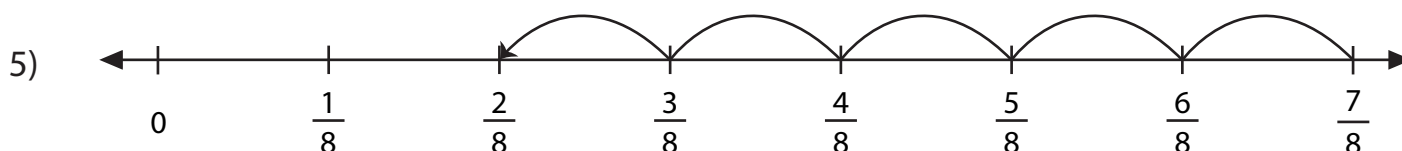
$$\frac{3}{4} - \frac{3}{4} = \underline{0}$$



$$\frac{4}{5} - \frac{1}{5} = \underline{\frac{3}{5}}$$



$$\frac{9}{10} - \frac{2}{10} = \underline{\frac{7}{10}}$$



$$\frac{7}{8} - \frac{5}{8} = \underline{\frac{2}{8} \text{ or } \frac{1}{4}}$$