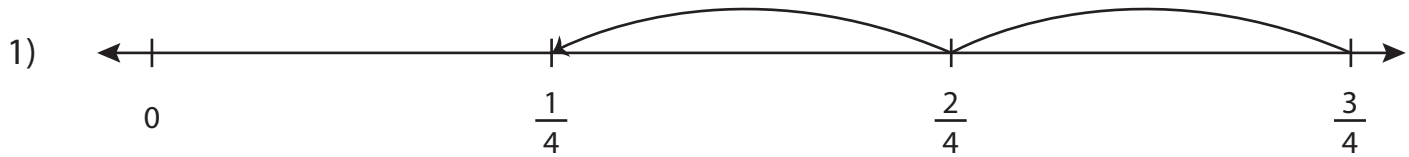


Subtracting Fractions on a Number Line

Complete the subtraction sentence that describes each model.



$$\underline{\hspace{2cm}} - \frac{2}{4} = \frac{1}{4}$$

2)

Preview

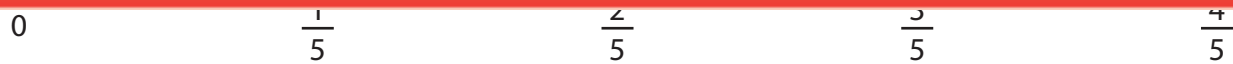
Become a member to unlock
unrestricted access to both printable
and online worksheets.



www.tutoringhour.com

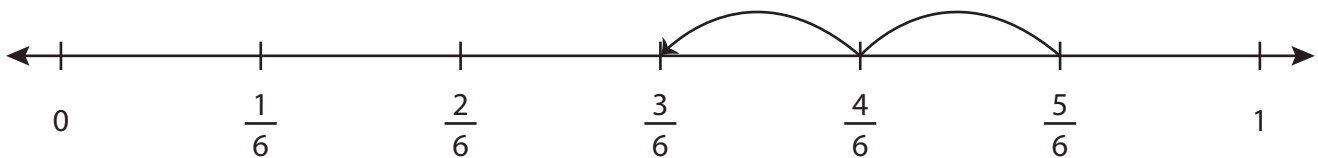
3)

4)



$$\underline{\hspace{2cm}} - \frac{3}{5} = \frac{1}{5}$$

5)



$$\frac{5}{6} - \underline{\hspace{2cm}} = \frac{3}{6}$$