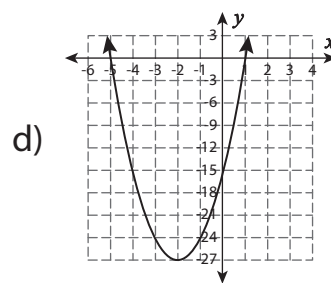
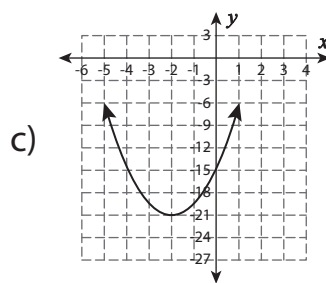
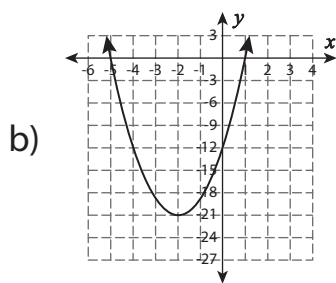
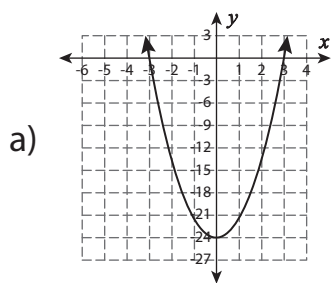


Graphing Quadratic Functions

- 1) Which of the following is the graph of $f(x) = 3x^2 + 12x - 15$?



- 2) Which of the following is the graph of $f(x) = x^2 - 4x + 5$?

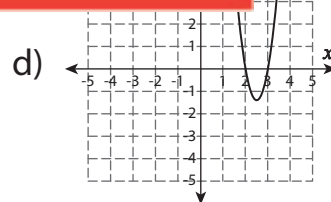
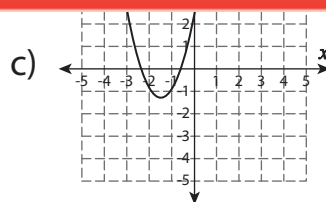
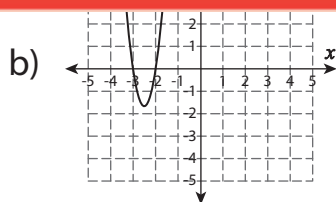
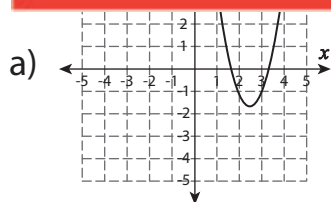
3)

Preview

**Become a member to unlock
unrestricted access to both printable
and online worksheets.**

4)

www.tutoringhour.com



- 5) Which of the following is the graph of $f(x) = -x^2 - 8x - 12$?

