

# One-Step Inequalities

Solve each inequality, and graph the solution.

1)  $\frac{x}{5} \leq 6$



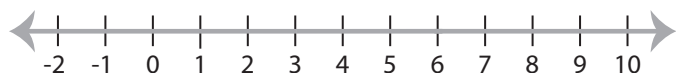
2)  $3x \geq 15$



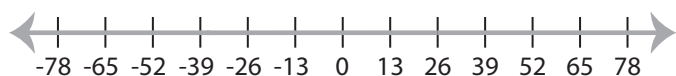
3)



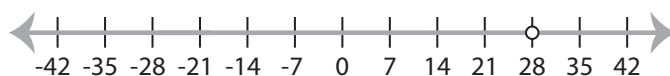
5)



7)  $x - 9 > 17$



8)  $\frac{x}{7} > 4$



## Preview

Become a member to unlock  
unrestricted access to both printable  
and online worksheets.



[www.tutoringhour.com](http://www.tutoringhour.com)