

# Two-Step Inequalities

Solve each inequality, and graph the solution.

1)  $1 + 3x \leq 7$



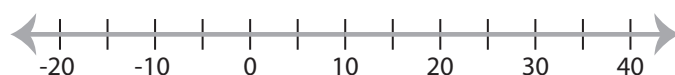
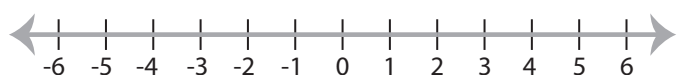
2)  $\frac{x}{9} - 2 < 5$



3)



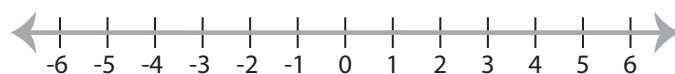
5)



7)  $6x - 8 > 22$



8)  $4x + 5 \leq 9$



## Preview

Become a member to unlock  
unrestricted access to both printable  
and online worksheets.



[www.tutoringhour.com](http://www.tutoringhour.com)