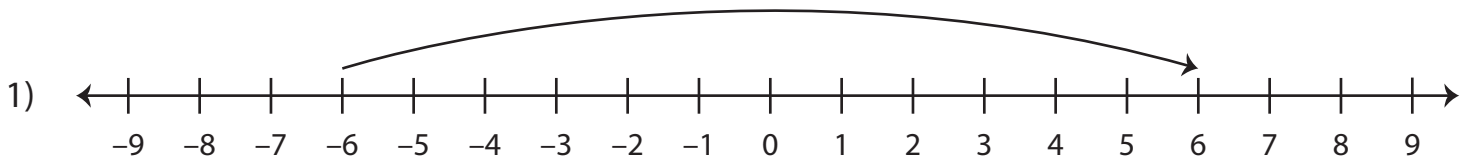


Writing Addition Sentences

Write the addition equation represented on each number line.



_____ + _____ = _____

2)

Preview

3)

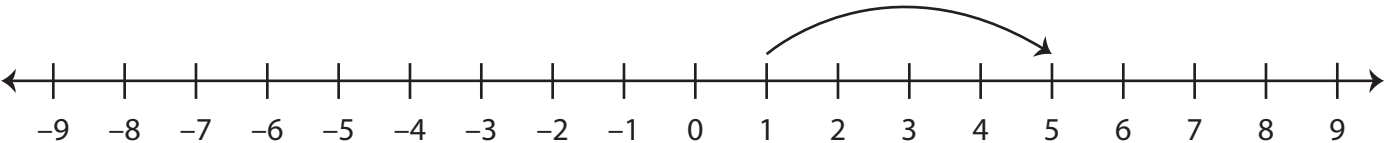
**Become a member to unlock
unrestricted access to both printable
and online worksheets.**

4)

www.tutoringhour.com

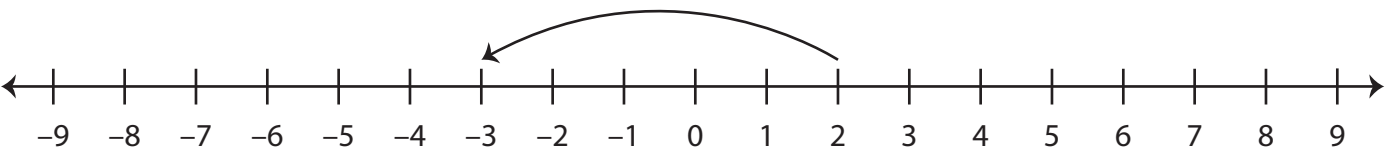


5)



_____ + _____ = _____

6)



_____ + _____ = _____