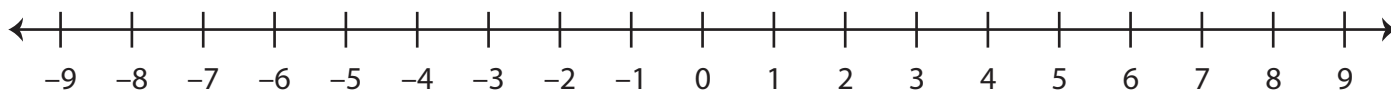


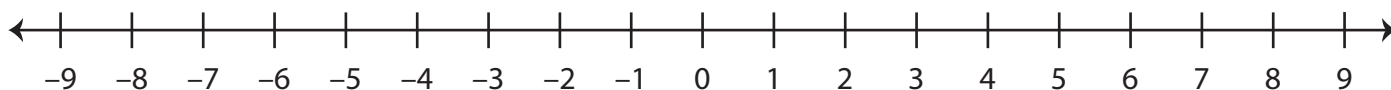
Number Line Addition

Find the sum using the number line.

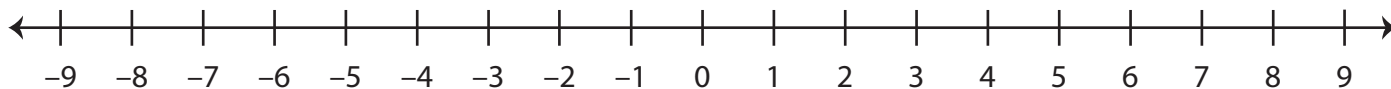
1) $2 + 5 =$ _____



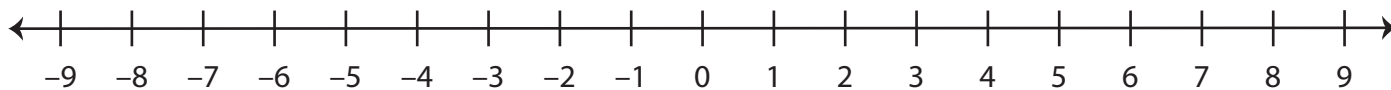
2) $-8 + (-1) =$ _____



3) $-6 + 3 =$ _____



4) $4 + (-4) =$ _____



5) $6 + 2 =$ _____

