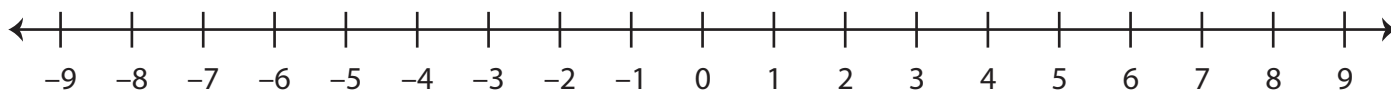


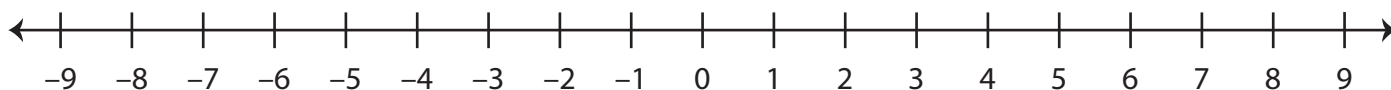
Number Line Addition

Find the sum using the number line.

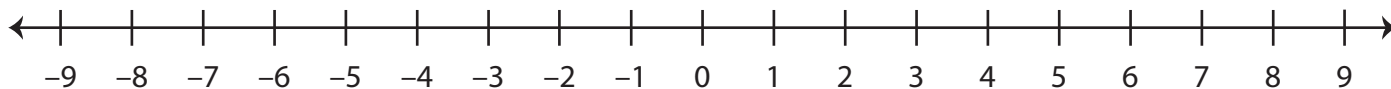
1) $-3 + (-3) =$ _____



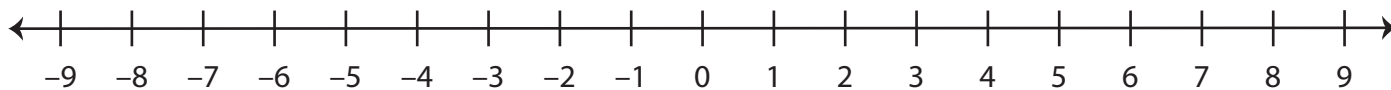
2) $7 + 2 =$ _____



3) $8 + (-6) =$ _____



4) $-9 + 8 =$ _____



5) $-4 + (-5) =$ _____

