



# Comparing Integers

A) Circle the fish with the larger integer in each bowl.


1)



2)



3)



4)

## Preview


Become a member to unlock  
unrestricted access to both printable  
and online worksheets.

B)


1)

[www.tutoringhour.com](http://www.tutoringhour.com)

4)



5)



6)

