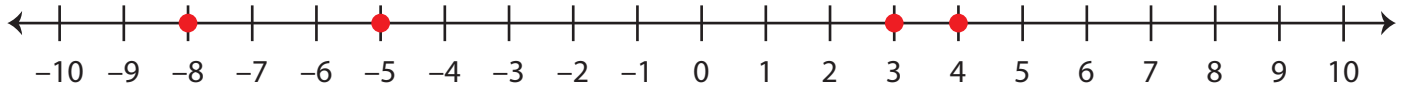


Integers on a Number Line

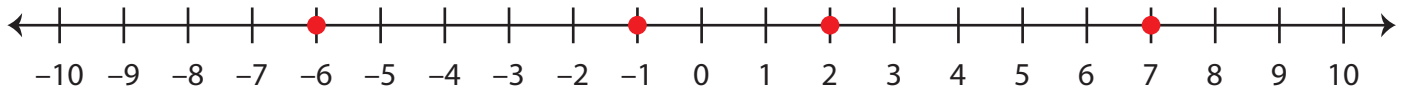
Answer Key

A) Locate the integers on the number line.

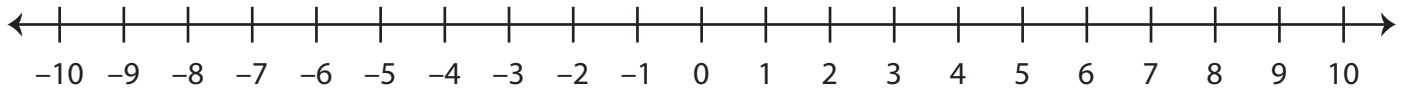
- 1) a) -8 b) 3 c) -5 d) 4



- 2) a) 2 b) -6 c) 7 d) -1



B) Observe the number line and answer the questions.



- | | |
|---|-------------------|
| 1) What integer is 2 units to the left of 1 ? | <u> -1 </u> |
| 2) What integer is 7 units to the left of 9 ? | <u> 2 </u> |
| 3) What integer is 9 units to the left of -1 ? | <u> -10 </u> |
| 4) What integer is 5 units to the right of 5 ? | <u> 10 </u> |
| 5) What integer is 1 unit to the right of -9 ? | <u> -8 </u> |
| 6) What integer is 4 units to the left of 8 ? | <u> 4 </u> |
| 7) What integer is 3 units to the right of -6 ? | <u> -3 </u> |