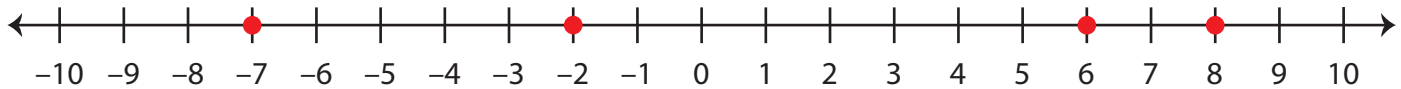


Integers on a Number Line

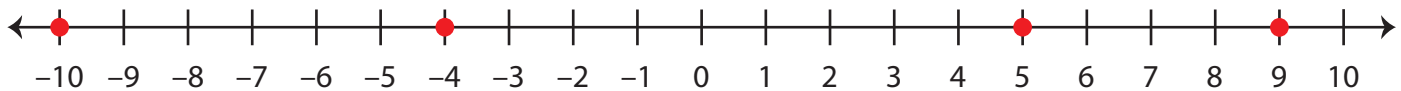
Answer Key

A) Locate the integers on the number line.

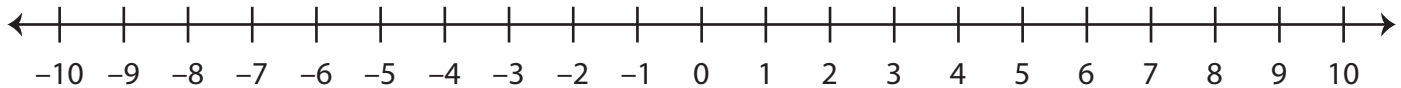
- 1) a) 6 b) -7 c) 8 d) -2



- 2) a) -10 b) 5 c) -4 d) 9



B) Observe the number line and answer the questions.



- 1) What integer is 6 units to the right of -3 ? 3
- 2) What integer is 7 units to the right of -2 ? 5
- 3) What integer is 4 units to the left of 1 ? -3
- 4) What integer is 3 units to the left of 10 ? 7
- 5) What integer is 5 units to the left of -5 ? -10
- 6) What integer is 8 units to the right of -9 ? -1
- 7) What integer is 2 units to the right of 7 ? 9